


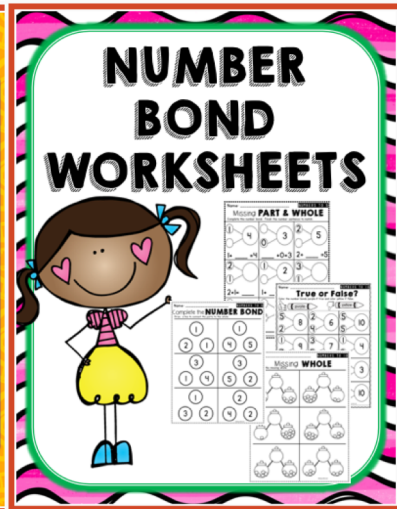
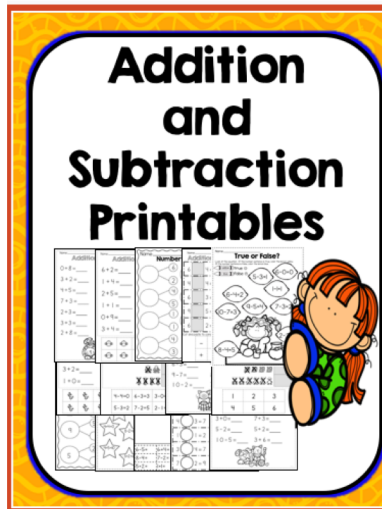
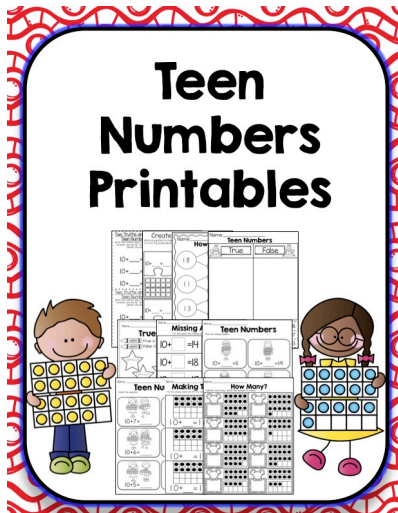
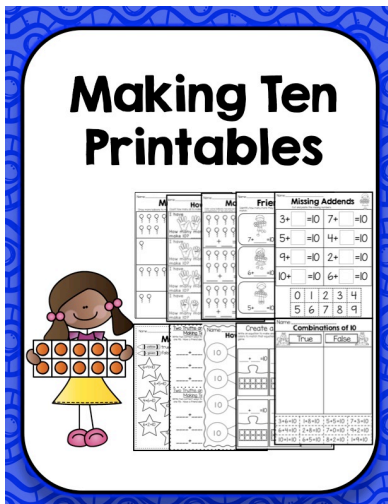
# KINDERGARTEN MATH WORKSHEETS

- numbers to 10
- teen numbers
- number bonds
- addition and subtraction
- making 10
- shapes

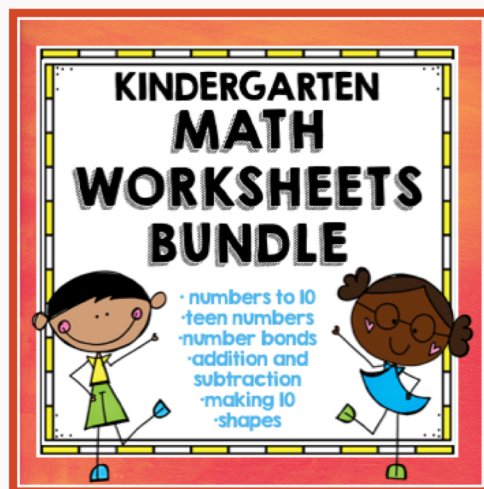


Thank you for your download! If you have any questions, feel free to email me at [moran.melissa@gmail.com](mailto:moran.melissa@gmail.com)

If you enjoyed this packet, you may also like my other math worksheet packets in my TPT store that cover each of the concepts more in depth. You can check it out by clicking the image below or by visiting my store.



Click on  
these  
images to  
find out  
more

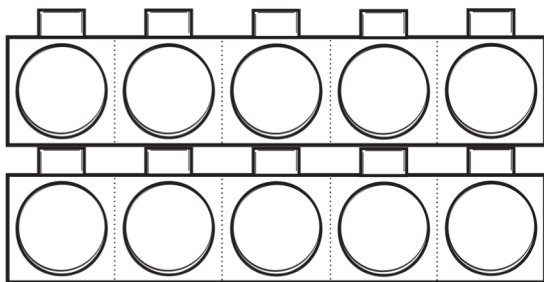


Name: \_\_\_\_\_

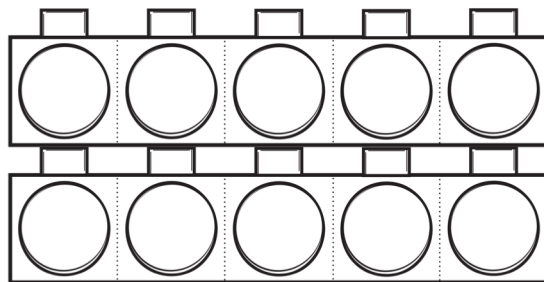
# COLOR IT!!!

Color the correct number of cubes.

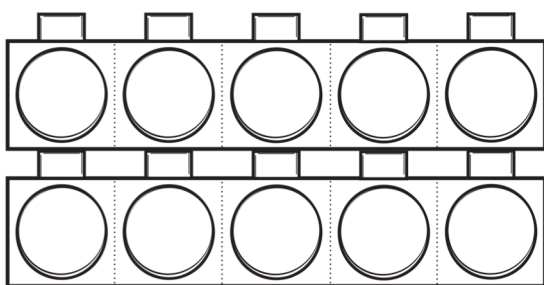
7



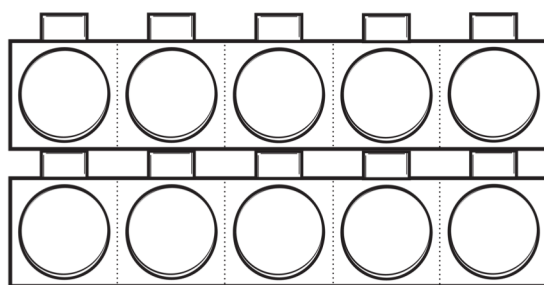
4



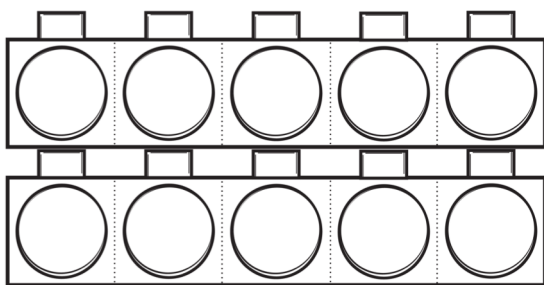
2



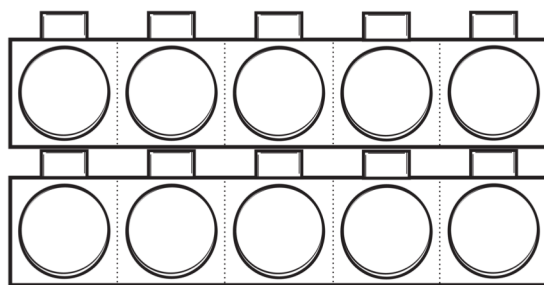
10



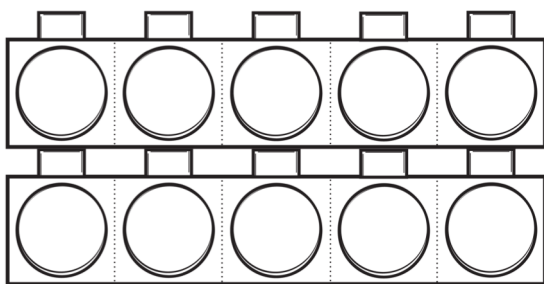
6



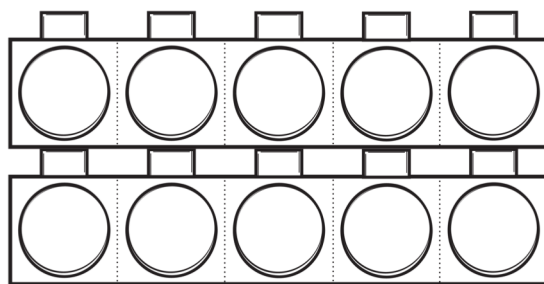
1



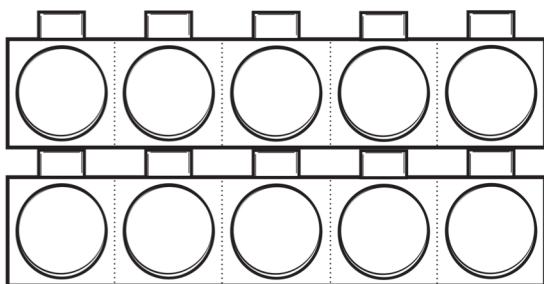
3



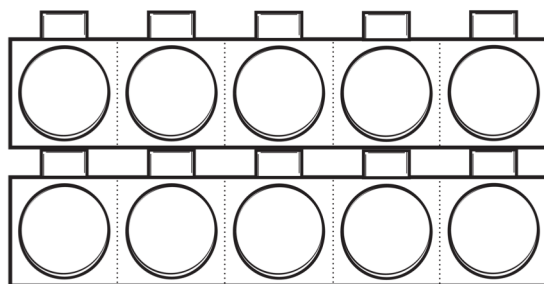
9



8




5

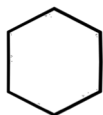


Name: \_\_\_\_\_

# COLOR, COUNT AND GRAPH



blue



purple




red



yellow



green



Count and write how many of each?

--	--	--	--	--

Graph it

1 2 3 4 5 6 7 8 9 10






Name: \_\_\_\_\_



# Subtraction Practice



$$8 - 4 =$$



$$6 - 3 =$$



$$3 - 3 =$$



$$5 - 2 =$$



$$4 - 1 =$$



$$10 - 6 =$$



$$2 - 1 =$$



$$7 - 6 =$$

Name: \_\_\_\_\_

NUMBERS TO 10

# True or False?

Color the number bonds purple if true and color yellow if false..




<p>5 2</p> <p>8</p>	<p>2 4</p> <p>6</p>	<p>5 5</p> <p>10</p>
<p>1 7</p> <p>9</p>	<p>3 5</p> <p>7</p>	<p>1 3</p> <p>4</p>
<p>3 5</p> <p>8</p>	<p>4 4</p> <p>9</p>	<p>1 2</p> <p>3</p>
<p>2 3</p> <p>4</p>	<p>4 3</p> <p>6</p>	<p>2 8</p> <p>10</p>


Name: \_\_\_\_\_

# Friends of Ten


Identify how many more they need to make ten. Fill in the number sentence to match.




$$7 + \underline{\quad} = 10$$




$$10 + \underline{\quad} = 10$$




$$6 + \underline{\quad} = 10$$



$$1 + \underline{\quad} = 10$$



$$5 + \underline{\quad} = 10$$



$$2 + \underline{\quad} = 10$$

Name: \_\_\_\_\_

# How Many?

Identify the number. Fill the tens frame to match.



























## Thank You:

Thank you for your purchase. I hope that you and your students enjoy it! I appreciate your feedback and if you have any questions, comments or suggestions, I would love to hear from you at [moran.melissa@gmail.com](mailto:moran.melissa@gmail.com) Please consider leaving feedback and becoming follower to be notified of new products. All new products are 50% off for the first 48 hours.

## Click to connect and follow me on social media:



## Terms of Use:

This product is for single classroom use only. If you wish to share this resource

with another teacher, please purchase an additional license at a discount price. Sharing of this product through internet groups, blogs, list servers, forums, offline groups, school district websites, servers, personal or classroom websites or email or for using it for commercial use is forbidden. Mass production is prohibited and it may not be sold on your personal website. If photographed please provide credit.

©Melissa Moran 2018

## Clip art and fonts from:

